

SUPERSTARS III

Uranus, XIV

Name: _____

(This shows my own thinking.)

- ★★★1. Carla sold lemonade at the school fair. She had only two sizes of cups: 5 oz. and 8 oz. Her friend Josie wanted to buy exactly 2 oz. How did Carla measure out 2 oz. of lemonade?

For the correct answer, arrange these steps in proper order by writing 1st, 2nd, 3rd, 4th, or 5th in the blanks beside the statements.

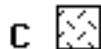
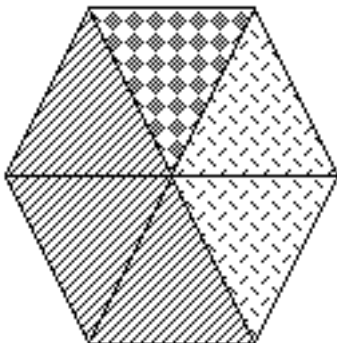
- _____ Pour its contents into the 8 oz. cup.
- _____ 2 oz. will remain in the 5 oz. cup.
- _____ Fill the 5 oz. cup.
- _____ Pour its contents into the 8 oz. cup until the large cup is filled.
- _____ Re-fill the 5 oz. cup.

- ★★2. Alison needs to add a liquid vitamin to her horse Bobo's food. The directions on the bottle say to add 7 ml per 25 pounds of the animal's body weight. If Bobo weighs 750 pounds, how much vitamin supplement should she add?

Answer: _____ mL



- ★★★3. Rounded to the nearest whole percent, what percent of the hexagon is each of the lettered parts?



Answer: A = _____

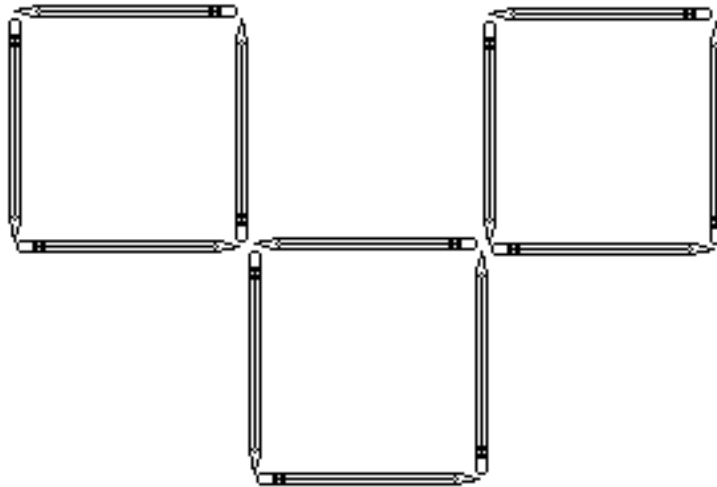
B = _____

C = _____

★★4. Eight girls are sitting at a table. Five are wearing sweaters, three are wearing coats, and two are wearing both sweaters and coats. How many girls are not wearing a coat or a sweater?

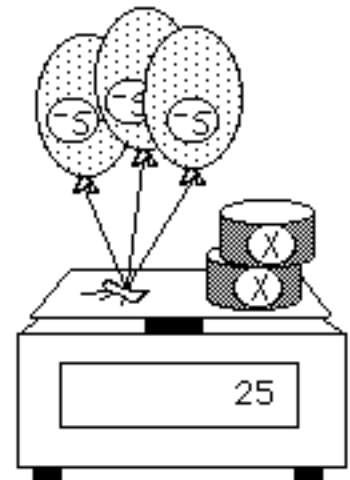
Answer: _____

★★★5. Three squares have been made from 12 pencils below. Show how to move only three of the pencils, and make four squares this same size.



★★★★ 6. The scale below shows three helium balloons attached to a scale, with two cans of unknown weight x . The helium balloons pull *up* on the scale, and so have a negative weight which has previously been measured as -5 because each one exactly balances a 5-gram weight. The cans push *down* on the scale and so have a positive unknown weight. Use your ingenuity to find the weight of one can.

Answer: $x =$ _____ grams



★★7. One gum ball costs 2 cents. The gum balls come in six different colors. What is the most money would you need to spend to ensure you get 3 gum balls of the same color? _____